



# INDIAN SCHOOL AL WADI AL KABIR

DEPARTMENT OF EVS (2025 – 2026)

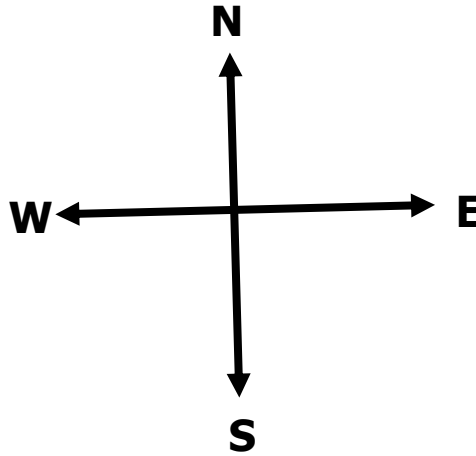
LESSON: LOCATING A PLACE AND OUR EARTH

WORKSHEET -1

RESOURCE PERSON: Viann Maria

NAME: \_\_\_\_\_ CLASS: \_\_\_ SEC: \_\_\_\_\_ DATE: \_\_\_\_\_

**Q1. Observe the pictures and fill in the blanks using the words given in the brackets.**



1. The bank is situated in the \_\_\_\_\_ direction. (east, south)

2. There is a \_\_\_\_\_ in the east. (park, playground)

3. The school is in the \_\_\_\_\_. (north, west)

4. The \_\_\_\_\_ is situated in the north. ( school, house)


The four directions are \_\_\_\_\_, \_\_\_\_\_, \_\_\_\_\_ and \_\_\_\_\_

**Q2. Fill in the blanks using the help box.**


water    four    atmosphere    east    round    west

1. The sun rises in the \_\_\_\_\_ and sets in the \_\_\_\_\_.
2. The shape of our earth is \_\_\_\_\_.
3. There are \_\_\_\_\_ important directions.
4. Most of the earth is covered with \_\_\_\_\_
5. The air surrounding our earth is called \_\_\_\_\_


**Q3. Identify the landforms and circle the correct option.**




mountain    plain    desert



plain    mountain    sea



sea    river    desert



hill    plain    desert



# INDIAN SCHOOL AL WADI AL KABIR

DEPARTMENT OF EVS (2025 – 2026)

LESSON: LOCATING A PLACE AND OUR EARTH

WORKSHEET-2

RESOURCE PERSON: Viann Maria

NAME: \_\_\_\_\_ CLASS: \_\_\_ SEC: \_\_\_\_\_ DATE: \_\_\_\_\_

**Q1. Match the following.**

A	B
a. Land that is very high	1. river
b. model of the earth	2. desert
c. farmers grow crops in	3. globe
d. big channel of flowing water	4. hill
e. sandy land	5. plain

a - \_\_\_\_\_, b - \_\_\_\_\_, c - \_\_\_\_\_, d - \_\_\_\_\_, e - \_\_\_\_\_



**Q2. Word search. Find the words related to directions hidden in the grid. Words can be horizontal or vertical.**



P	L	R	I	G	H	T	S
N	O	R	T	H	Y	M	O
Q	X	L	E	F	T	D	U
S	T	R	A	I	G	H	T
K	F	I	S	P	I	A	H
W	E	S	T	D	O	W	N

1. LEFT
2. RIGHT
3. STRAIGHT
4. EAST
5. WEST
6. DOWN
7. NORTH
8. SOUTH


**Q3. Answer the following questions.**

1. It was very hot in the plains, so Kevin's family decided to visit the hills station that weekend. Kevin felt happy and comfortable there. Why do you think Kevin felt more comfortable in the hills during summer?




Ans \_\_\_\_\_  
\_\_\_\_\_

2. Ricky and Tim went on a trip to a place where there was sand everywhere. The sun was very hot, and they could see very few plants and animals. What kind of land did they visit?



Ans \_\_\_\_\_  
\_\_\_\_\_

3. Merlin is facing the rising sun. Can you identify the direction she is facing.



Ans \_\_\_\_\_  
\_\_\_\_\_  
\_\_\_\_\_

Write the name of the direction behind her?

Ans \_\_\_\_\_  
\_\_\_\_\_  
\_\_\_\_\_



# INDIAN SCHOOL AL WADI AL KABIR

DEPARTMENT OF EVS (2025 – 2026)

LESSON: LOCATING A PLACE AND OUR EARTH

CHAPTER CHECKUP WORKSHEET

RESOURCE PERSON: Viann Maria



NAME: \_\_\_\_\_ CLASS: \_\_\_ SEC: \_\_\_\_\_ DATE: \_\_\_\_\_

**Q1. Fill in the blanks with correct answer given in brackets.**



1. Farmers grow crops in the \_\_\_\_\_. ( plain / hills)
2. Snow on the mountains melts and form \_\_\_\_\_ ( oceans / rivers)
3. \_\_\_\_\_ (Air / Water) covers the earth like a blanket.
4. We use \_\_\_\_\_ to locate places in our neighbourhood. (sun / directions)
5. A \_\_\_\_\_ is drawn on a piece of paper. (globe/ map)

**Q2. Look at the following pictures and name them.**



**Q3. Answer the following questions.**

1. Name the three things necessary for life?

Ans \_\_\_\_\_

2. Why do we call the earth our home?

Ans \_\_\_\_\_

3. What are the major changes brought by humans on the earth?

Ans \_\_\_\_\_  
\_\_\_\_\_

4. In the picture below, we can see smoke coming out of the factory. Answer the following question based on the following picture.



a. Do you think sending smoke into the air is good for our Earth?

Ans \_\_\_\_\_  
\_\_\_\_\_

b. How will this activity be harmful to our earth.

Ans \_\_\_\_\_  
\_\_\_\_\_

**Q4. Write what you hear. Dictation test on the lesson locating a place and our earth.**

1. \_\_\_\_\_

4. \_\_\_\_\_

2. \_\_\_\_\_

5. \_\_\_\_\_

3. \_\_\_\_\_



Rate this worksheet!  
How much did you  
enjoy doing it?



Great! I understood.



Pretty good. I got it!



Okay! I need some help.



# INDIAN SCHOOL AL WADI AL KABIR

DEPARTMENT OF EVS (2025 – 2026)

**Answer key**

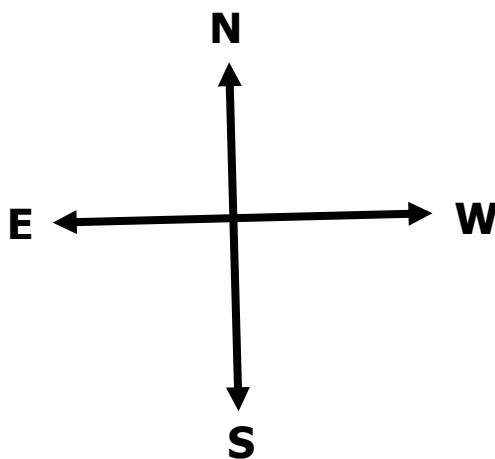
LESSON: LOCATING A PLACE AND OUR EARTH

WORKSHEET -1

RESOURCE PERSON: Viann Maria

NAME: \_\_\_\_\_ CLASS: \_\_\_ SEC: \_\_\_\_\_ DATE: \_\_\_\_\_

**Q1. Observe the pictures and fill in the blanks using the words given in the brackets.**



1. The bank is situated in the south direction. (east, south)

2. There is a park in the east. (park, bus stop)

3. The school is in the west. (north, west)

4. The house is situated in the north. ( school, house)

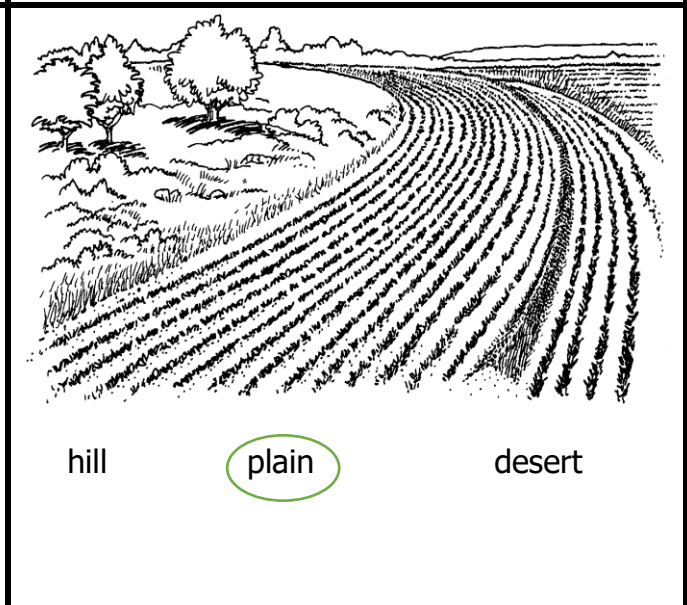

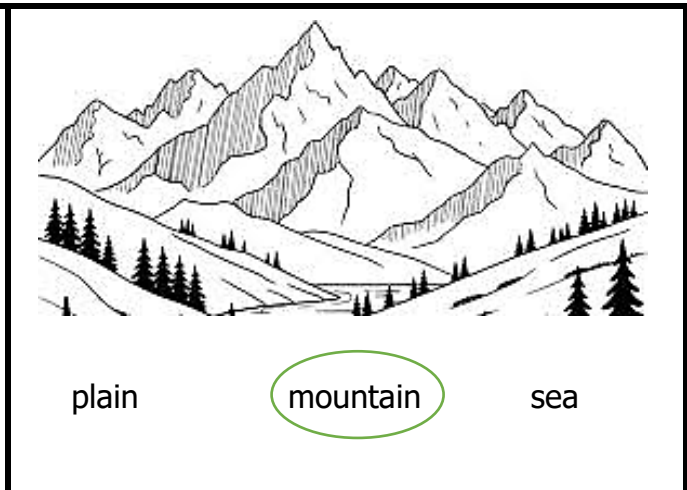
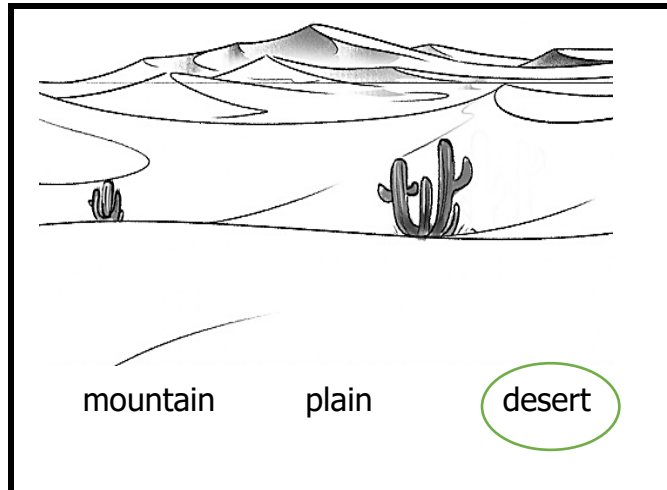
The four directions are north, south, east and west

**Q2. Fill in the blanks using the help box.**

water    four    atmosphere    east    round    west

1. The sun rises in the east and sets in the west.
2. The shape of our earth is round.
3. There are four important directions.
4. Most of the earth is covered with water.
5. The air surrounding our earth is called atmosphere.

**Q3. Identify the landforms and circle the correct option.**





# INDIAN SCHOOL AL WADI AL KABIR

DEPARTMENT OF EVS (2025 – 2026)

**Answer key**  
**WORKSHEET-2**

LESSON: LOCATING A PLACE AND OUR EARTH

RESOURCE PERSON: Viann Maria

NAME: \_\_\_\_\_ CLASS: \_\_\_\_\_ SEC: \_\_\_\_\_ DATE: \_\_\_\_\_


**Q1. Match the following.**

A	B
a. Land that is very high	1. river
b. model of the earth	2. desert
c. farmers grow crops in	3. globe
d. big channel of flowing water	4. hill
e. sandy land	5. plain

a - 4 , b - 3 , c - 5 , d - 1 , e - 2



**Q2. Word search. Find the words related to directions hidden in the grid. Words can be horizontal or vertical.**



P	L	R	I	G	H	T	S
N	O	R	T	H	Y	M	O
Q	X	L	E	F	T	D	U
S	T	R	A	I	G	H	T
K	F	I	S	P	I	A	H
W	E	S	T	D	O	W	N

1. LEFT
2. RIGHT
3. STRAIGHT
4. EAST
5. WEST
6. DOWN
7. NORTH
8. SOUTH


**Q3. Answer the following questions.**

1. It was very hot in the plains, so Kevin's family decided to visit the hills station that weekend. Kevin felt happy and comfortable there. Why do you think Kevin felt more comfortable in the hills during summer?

Ans **Hills are not as hot as plains. So Kevin felt happy and comfortable in hills.**



2.



Ricky and Tim went on a trip to a place where there was sand everywhere. The sun was very hot, and they could see very few plants and animals. What kind of land did they visit?

Ans **Ricky and Tim visited**

**a desert.**

3. Merlin is facing the rising sun. Can you identify the direction she is facing.

Ans **Merlin is facing the east.**

Write the name of the direction behind her?

Ans **The direction behind her is the**

**west.**





# INDIAN SCHOOL AL WADI AL KABIR

DEPARTMENT OF EVS (2025 – 2026)

LESSON: LOCATING A PLACE AND OUR EARTH

Chapter checkup worksheet

RESOURCE PERSON: Viann Maria

**Answer key**


NAME: \_\_\_\_\_ CLASS: \_\_\_ SEC: \_\_\_\_\_ DATE: \_\_\_\_\_

**Q1. Fill in the blanks with correct answer given in brackets.**



1. Farmers grow crops in the plains . ( plains / hills)
2. Snow on the mountains melts and form rivers ( oceans / rivers)
3. Air (Air / Water) covers the earth like a blanket.
4. We use directions to locate places in our neighbourhood. (sun / directions)
5. A map is drawn on a piece of paper. (globe/ map)


**Q2. Look at the following pictures and name them.**



**dam**



**globe**



**building**

**Q3. Answer the following questions.**

1. Name the three things necessary for life?

Ans **Land , water and air are the three things necessary for life .**

2. Why do we call the earth our home?

Ans **We call earth our home because all plants and animals and we live on earth.**

3. What are the major changes brought by humans on the earth?

Ans **Humans have built buildings, factories, roads, bridges and dams on the earth.**

4. In the picture below, we can see smoke coming out of the factory. Answer the following question based on the following picture.



a. Do you think sending smoke into the air is good for our earth?

Ans **No, sending smoke into the air is not good for the earth.**

b. How will this activity be harmful to our earth?

Ans **This activity will makes our earth dirty.**

**Q4. Write what you hear. Dictation test on the topic**



1. **locate**

4. **desert**

2. **bridges**

5. **globe**

3. **south**



Rate this worksheet!  
How much did you  
enjoy doing it?



Great! I understood.



Pretty good. I got it!



Okay! I need some help.